













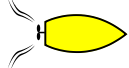
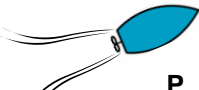


Vigeregler 8 - blandet

Vis med pile, hvilken vej bådene skal sejle.
Hvilken vigeregler har du brugt?

<p>A </p> <p>B </p>	<p>C </p> <p>D </p>
<p>E </p> <p>F </p>	<p>G </p> <p>H </p>
<p>I </p> <p>J </p>	<p>K </p> <p>L </p>
<p>M </p> <p>N </p>	<p>O </p> <p>P </p>